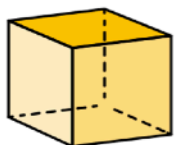
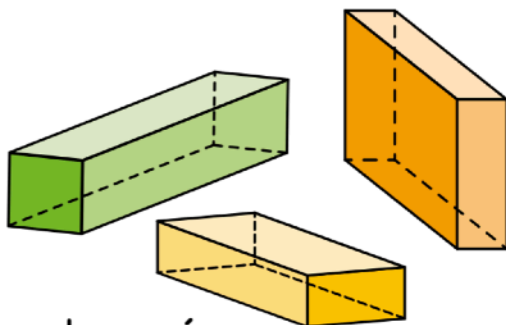


Les solides

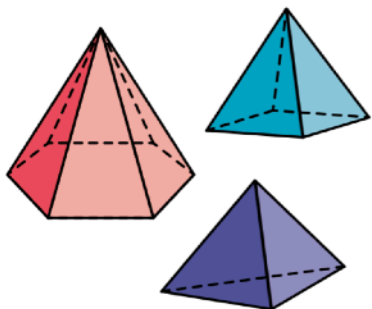
Je sais reconnaître les solides suivants : un cube, un pavé, une pyramide, une boule, un cylindre, un cône.



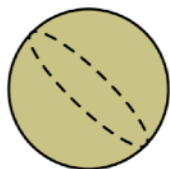
un cube




des pavés



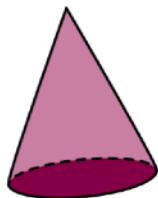
des pyramides



une boule



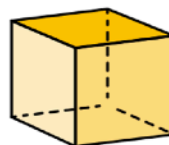
un cylindre



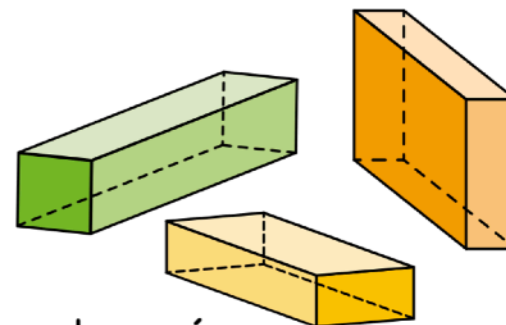
un cône

Les solides

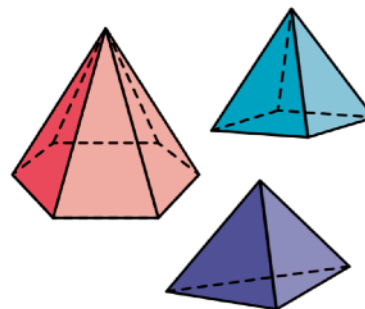
Je sais reconnaître les solides suivants : un cube, un pavé, une pyramide, une boule, un cylindre, un cône.



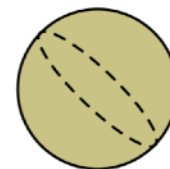
un cube



des pavés



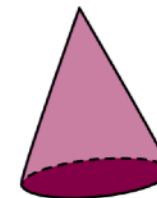
des pyramides



une boule



un cylindre



un cône