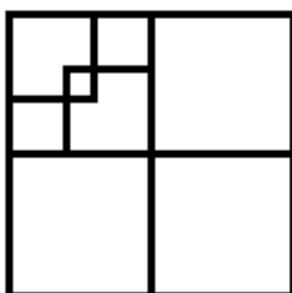


Défi n°1 : GS - CP  
Ensemble, les carrés ...  
(Défi maths n°1 - Sarrebourg Est et Ouest)



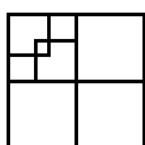
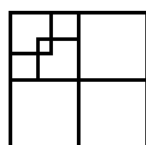
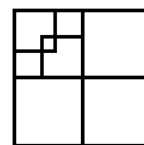
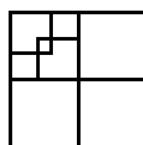
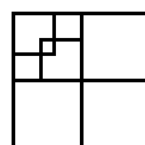
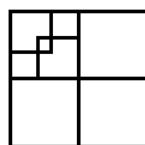
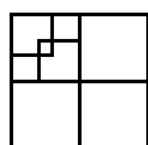
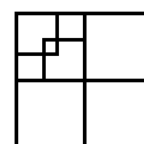
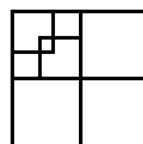
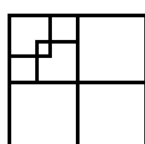
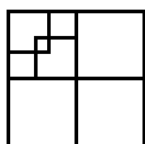
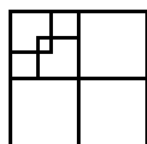
Pierre a tracé une figure géométrique. Combien de carrés vois-tu dans son dessin ?



(Source JISigrist)

Pour t'aider dans tes  
les modèles ci-dessous :

recherches, tu peux utiliser



Bonne chance.